







Name: \_\_\_\_\_

# Fishing Trip Pictograph

Michael, Emily, Jose, Jennifer, and Kevin went on a fishing trip. The pictograph below shows how many fish each caught. Use the pictograph to answer the questions.

Number of Fish Caught

Michael	
Emily	
Jose	
Jennifer	
Kevin	

 = 6 fish

1. How many fish did Michael catch? 1. \_\_\_\_\_
2. How many fish did Emily catch? 2. \_\_\_\_\_
3. How many fish did Kevin catch? 3. \_\_\_\_\_
4. How many more fish did Emily catch than Jose? 4. \_\_\_\_\_
5. How many fish did the girls catch? 5. \_\_\_\_\_
6. How many fish did boys catch? 6. \_\_\_\_\_
7. How many more fish did the girls catch than the boys? 7. \_\_\_\_\_
8. How many fish did Jose and Kevin catch? 8. \_\_\_\_\_
9. Find the sum of the fish caught by all five people? 9. \_\_\_\_\_
10. Who caught fewer fish, Jennifer or Emily? 10. \_\_\_\_\_
11. Did Jennifer catch an odd or even number of fish? 11. \_\_\_\_\_
12. Jose said, "I caught a dozen fish!" Is he correct? Explain. 12. \_\_\_\_\_