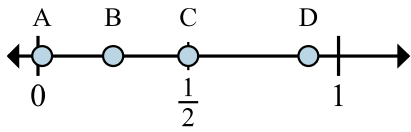
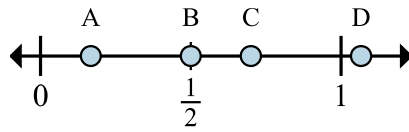




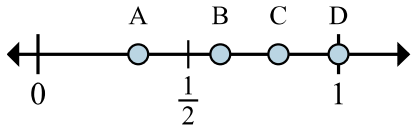
Determine which letter best shows the location of the fraction.



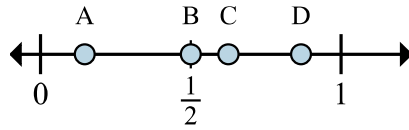
- 1) Which letter best shows  $\frac{1}{4}$ ?
- 2) Which letter best shows  $\frac{2}{4}$ ?



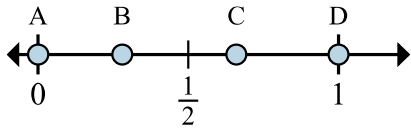
- 3) Which letter best shows  $\frac{3}{6}$ ?
- 4) Which letter best shows  $\frac{1}{6}$ ?



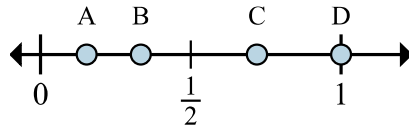
- 5) Which letter best shows  $\frac{3}{3}$ ?
- 6) Which letter best shows  $\frac{1}{3}$ ?



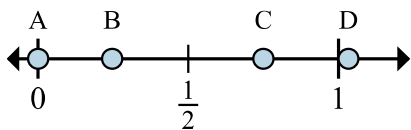
- 7) Which letter best shows  $\frac{4}{8}$ ?
- 8) Which letter best shows  $\frac{5}{8}$ ?



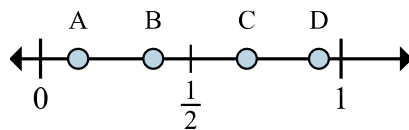
- 9) Which letter best shows  $\frac{0}{2}$ ?
- 10) Which letter best shows  $\frac{2}{2}$ ?



- 11) Which letter best shows  $\frac{2}{6}$ ?
- 12) Which letter best shows  $\frac{6}{6}$ ?



- 13) Which letter best shows  $\frac{0}{4}$ ?
- 14) Which letter best shows  $\frac{3}{4}$ ?



- 15) Which letter best shows  $\frac{3}{8}$ ?
- 16) Which letter best shows  $\frac{1}{8}$ ?

Answers

1. \_\_\_\_\_
2. \_\_\_\_\_
3. \_\_\_\_\_
4. \_\_\_\_\_
5. \_\_\_\_\_
6. \_\_\_\_\_
7. \_\_\_\_\_
8. \_\_\_\_\_
9. \_\_\_\_\_
10. \_\_\_\_\_
11. \_\_\_\_\_
12. \_\_\_\_\_
13. \_\_\_\_\_
14. \_\_\_\_\_
15. \_\_\_\_\_
16. \_\_\_\_\_