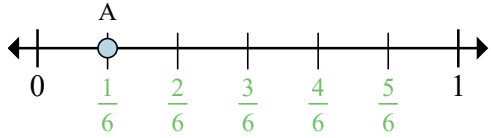
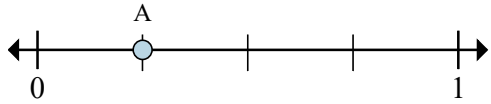


Determine which letter best shows the location of the fraction.



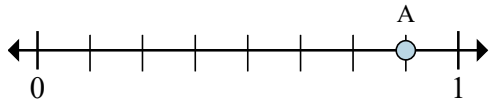
Ex) This numberline is divided into how many pieces?

Ex) What is the location of A (written as a fraction)?



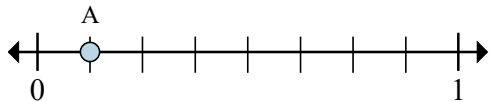
1) This numberline is divided into how many pieces?

2) What is the location of A (written as a fraction)?

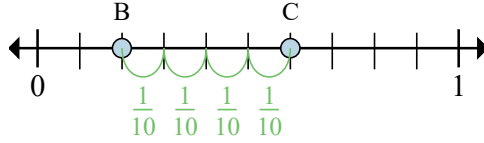


5) This numberline is divided into how many pieces?

6) What is the location of A (written as a fraction)?

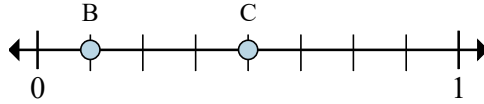


9) This numberline is divided into how



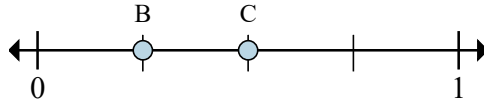
Ex) On this numberline what is the value of 0 written as a fraction?

Ex) On this numberline from B to C is how far (written as a fraction)?



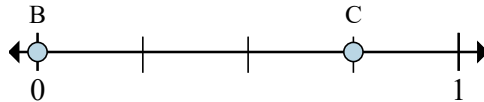
3) On this numberline what is the value of 0 written as a fraction?

4) On this numberline from B to C is how far (written as a fraction)?



7) On this numberline what is the value of 0 written as a fraction?

8) On this numberline from B to C is how far (written as a fraction)?



11) On this numberline what is the value

Answers

Ex. 6

Ex. 1/6

Ex. 0/10

Ex. 4/10

1. \_\_\_\_\_

2. \_\_\_\_\_

3. \_\_\_\_\_

4. \_\_\_\_\_

5. \_\_\_\_\_

6. \_\_\_\_\_

7. \_\_\_\_\_

8. \_\_\_\_\_

9. \_\_\_\_\_

10. \_\_\_\_\_

11. \_\_\_\_\_

12. \_\_\_\_\_