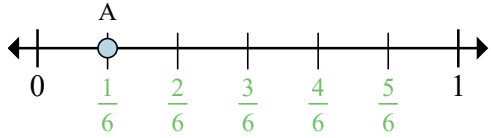
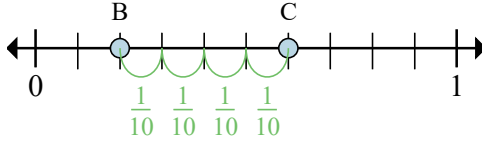


Determine which letter best shows the location of the fraction.



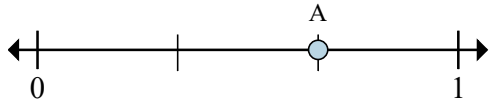
Ex) This numberline is divided into how many pieces?

Ex) What is the location of A (written as a fraction)?



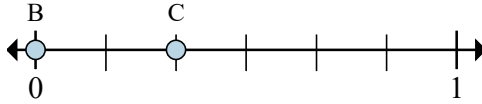
Ex) On this numberline what is the value of 0 written as a fraction?

Ex) On this numberline from B to C is how far (written as a fraction)?



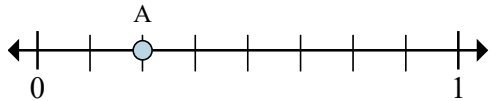
1) This numberline is divided into how many pieces?

2) What is the location of A (written as a fraction)?



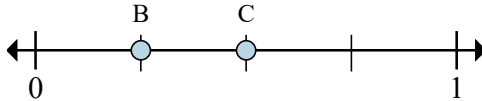
3) On this numberline what is the value of 1 written as a fraction?

4) On this numberline from B to C is how far (written as a fraction)?



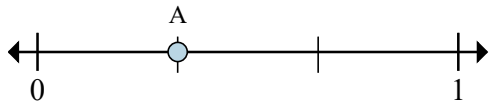
5) This numberline is divided into how many pieces?

6) What is the location of A (written as a fraction)?

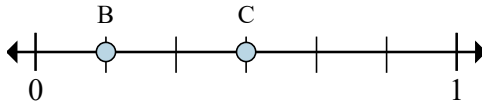


7) On this numberline what is the value of 0 written as a fraction?

8) On this numberline from B to C is how far (written as a fraction)?



9) This numberline is divided into how



11) On this numberline what is the value

Answers

Ex. 6

Ex. $\frac{1}{6}$

Ex. $\frac{0}{10}$

Ex. $\frac{4}{10}$

1. _____

2. _____

3. _____

4. _____

5. _____

6. _____

7. _____

8. _____

9. _____

10. _____

11. _____

12. _____